


Matte+

Träna mera



Addition 0-100

Addition med 10

Addition utan övergång


Addition med övergång

Namn:


Upphovsrätten till materialet tillhör Skolplus AB och respektive upphovsman. Materialet kan användas i den egna interna verksamheten under förutsättning att man har en licens för Skolplus. Se vår webbsida skolplus.se för priser. Materialet får ej spridas vidare på till exempel internet.



Vilket tal kommer ut ur additionsmaskinen?



Vad händer inne i additionsmaskinen?



Addera.

$10 + 20 = \underline{\hspace{2cm}}$

$40 + 30 = \underline{\hspace{2cm}}$

$20 + 40 = \underline{\hspace{2cm}}$

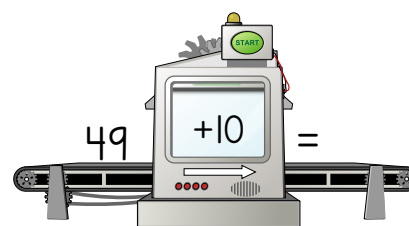
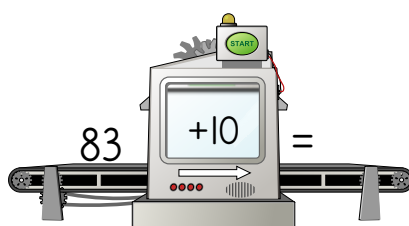
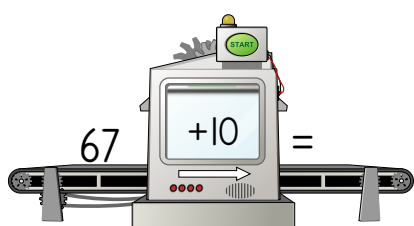
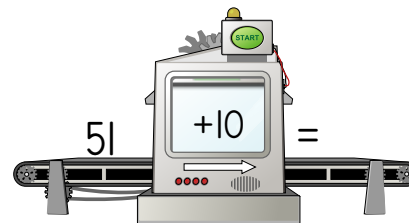
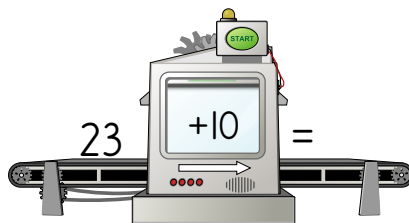
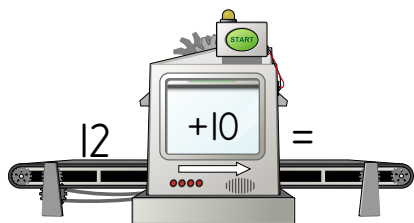
$20 + 60 = \underline{\hspace{2cm}}$

$50 + 10 = \underline{\hspace{2cm}}$

$70 + 30 = \underline{\hspace{2cm}}$



Vilket tal kommer ut ur additionsmaskinen?



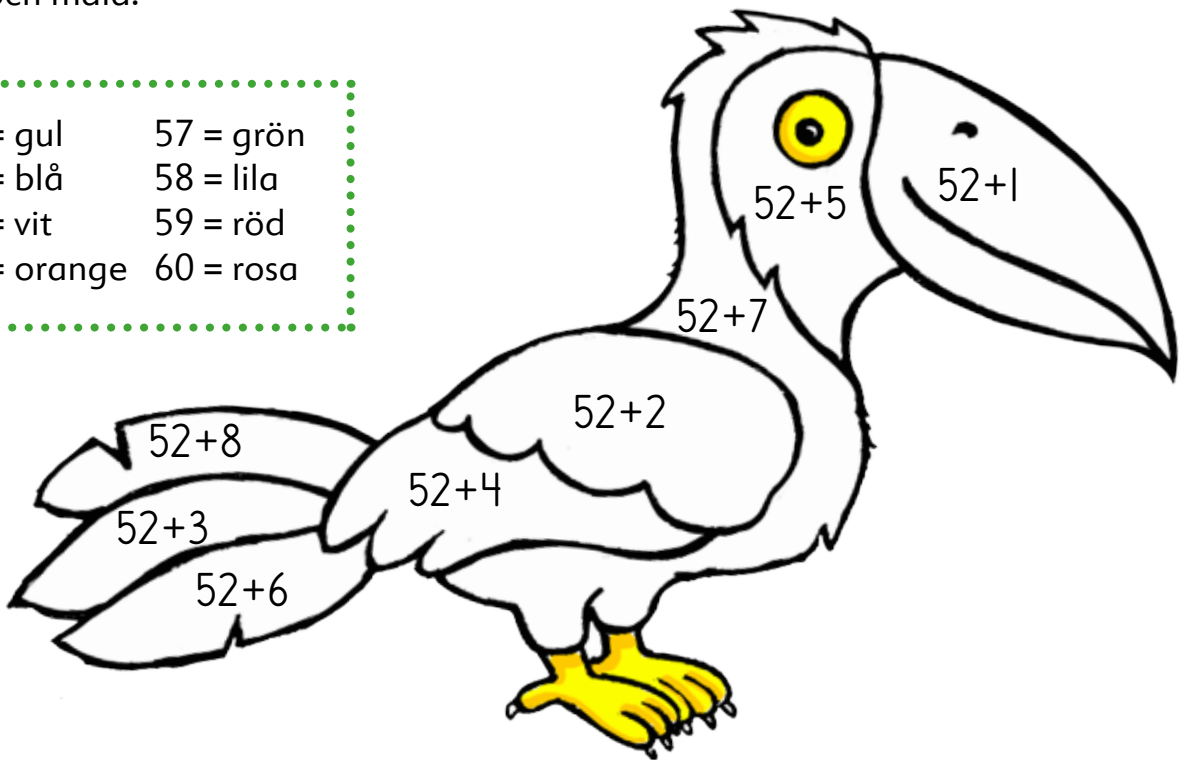
Krokodilen är trött. Han hoppar 10 i taget. Måla rutorna fram till kudden.

		7	15	16	74
28	8	17	18	88	78
38	27	25	64	77	89
37	47	58	67	73	87
48	56	57	68	96	97




Räkna och måla.


53 = gul	57 = grön
54 = blå	58 = lila
55 = vit	59 = röd
56 = orange	60 = rosa



Addera 1 i taget. Skriv talen som saknas.



Addera 2 i taget. Skriv talen som saknas.



Addera.

$36 + 3 = \underline{\quad}$

$91 + 7 = \underline{\quad}$

$63 + 3 = \underline{\quad}$

$74 + 4 = \underline{\quad}$

$42 + 5 = \underline{\quad}$

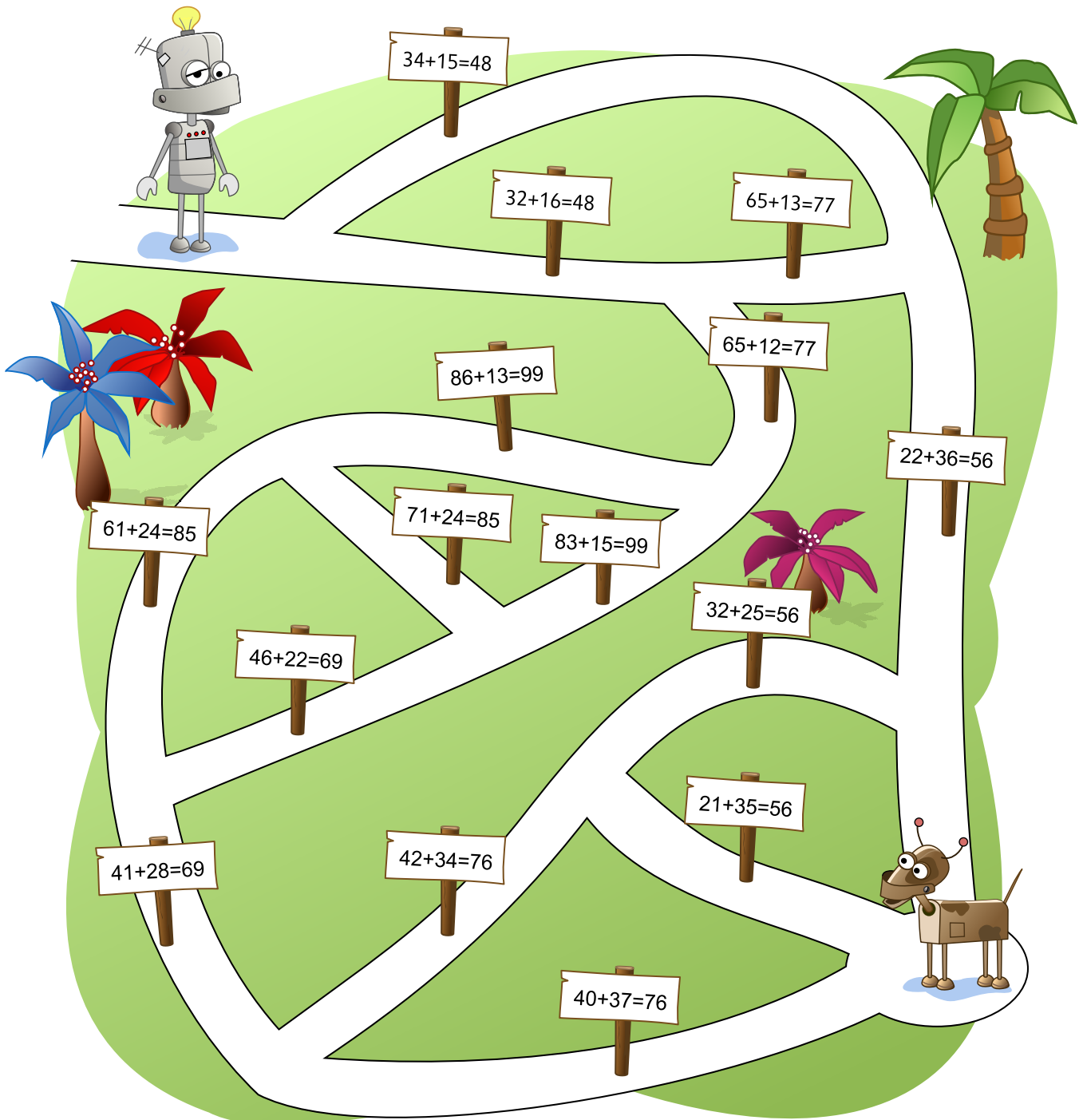
$85 + 4 = \underline{\quad}$



Hjälp Robbe att hitta sin hund. Följ skyltarna som visar rätt addition.

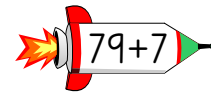


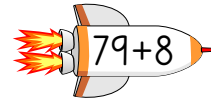
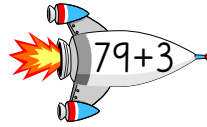

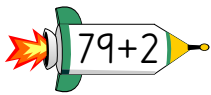
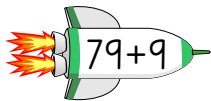
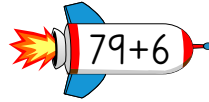
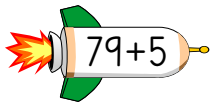
Tip^s Dela upp den andra termen i tital och ental innan du adderar.

$$\begin{array}{r} 26 + 12 \\ \downarrow \downarrow \\ 26 + 10 + 2 \end{array}$$






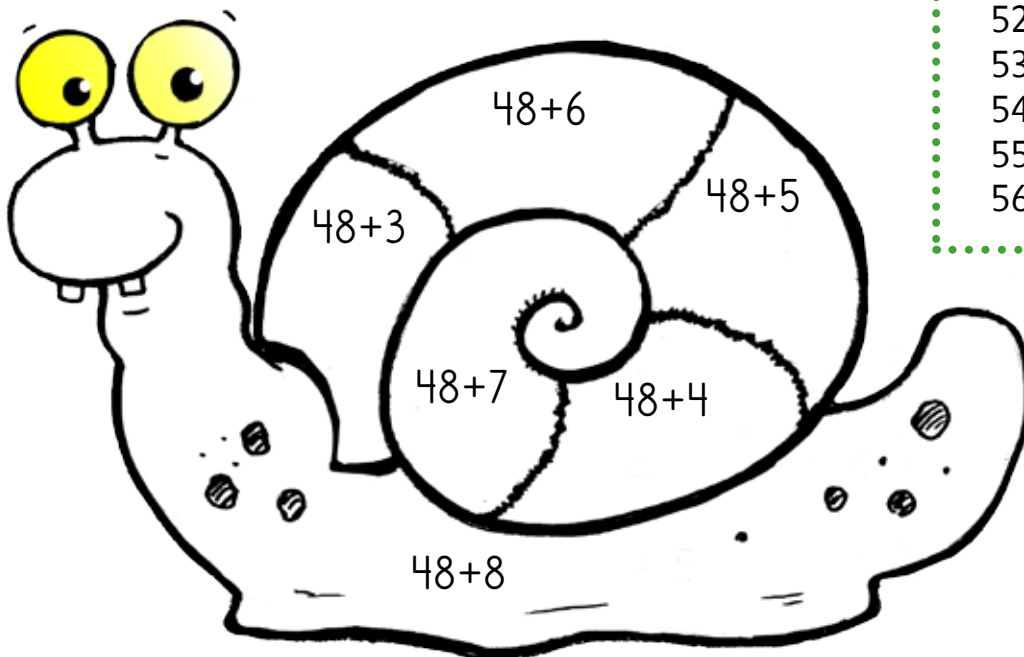
Vart ska raketerna? Para ihop additionerna med rätt summa. Dra streck.



Räkna först upp till helt tiotal. Hmm, hur många har jag nu kvar att addera?



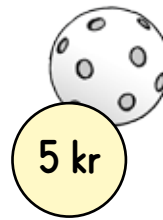
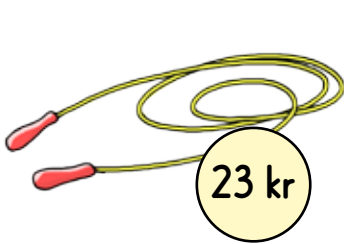
Räkna och måla.



- 51 = gul
- 52 = orange
- 53 = röd
- 54 = lila
- 55 = blå
- 56 = brun



Addition 0-100 • addition med och utan övergång



Hur mycket ska du betala?

_____ + _____ = _____ kr

_____ + _____ = _____ kr

_____ + _____ = _____ kr

_____ + _____ = _____ kr

_____ + _____ = _____ kr

_____ + _____ = _____ kr