


# Matte+

Träna mera



## Analoga klockan

kvart


Namn: .....

Upphovsrätten till materialet tillhör Skolplus AB och respektive upphovsman. Materialet kan användas i den egna interna verksamheten under förutsättning att man har en licens för skolplus. Se vår webbsida skolplus.se för priser. Materialet får ej spridas vidare på till exempel internet.

Av Sara Bergroth och Skolplus AB

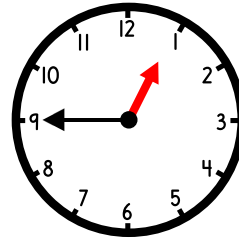
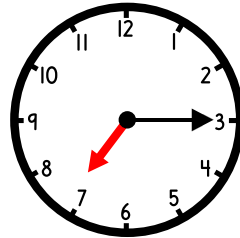
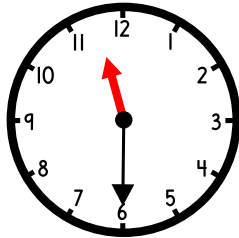
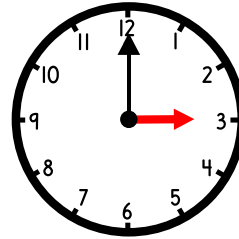
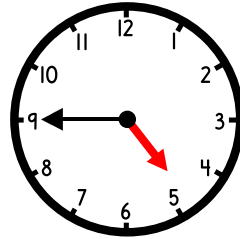
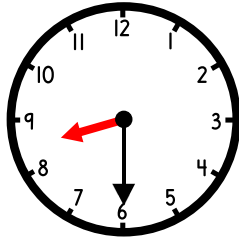


Vilka klockor visar kvart i eller kvart över? Måla dem.



kvart över

kvart i



Måla den klocka och tid som hör ihop i samma färg.

kvart över 1

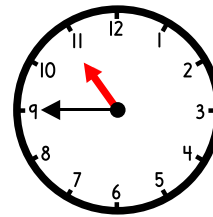
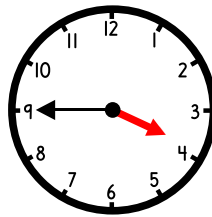
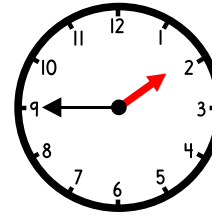
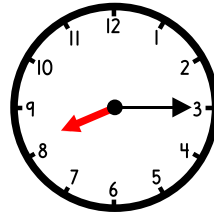
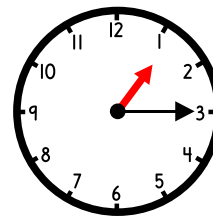
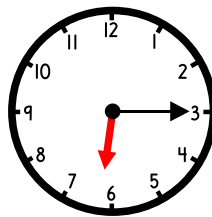
kvart över 8

kvart över 6

kvart i 2


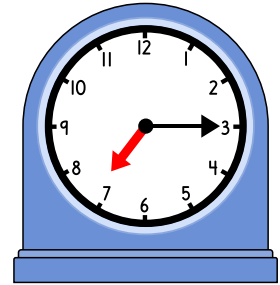
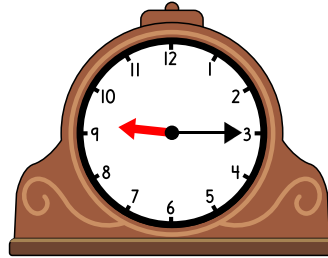
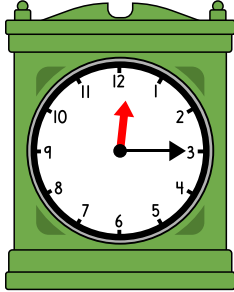
kvart i 11

kvart i 4





Hur mycket är klockan?


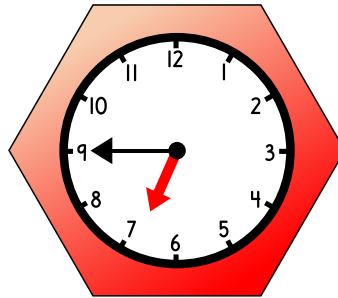
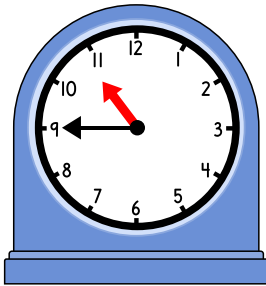


*kvart över 12*

\_\_\_\_\_

\_\_\_\_\_

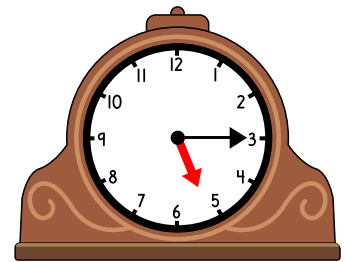
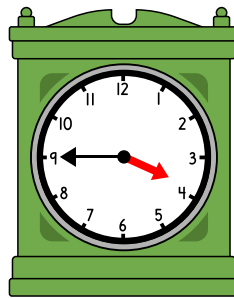

\_\_\_\_\_



\_\_\_\_\_

\_\_\_\_\_

\_\_\_\_\_




\_\_\_\_\_

\_\_\_\_\_


\_\_\_\_\_




Rita timvisaren.



kvart i 12




kvart över 8




kvart i 3


Rita visare.




kvart över 10



kvart över 1




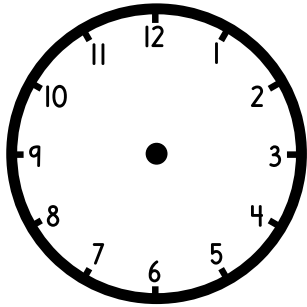
kvart i 2



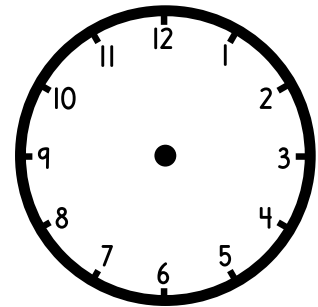

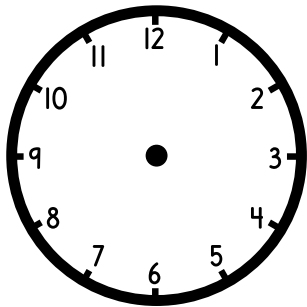
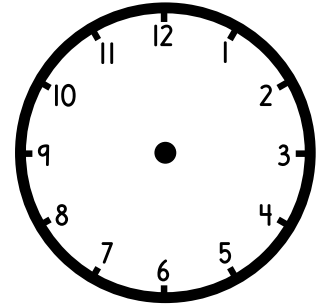
kvart i 8



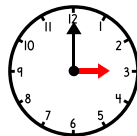
Vad var klockan för en kvart sedan?



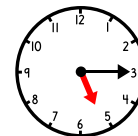
Vad är klockan om en kvart?



Krokodilen börjar dammsuga



och är klar

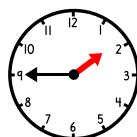


Hur länge dammsög han?

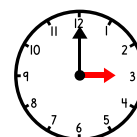
\_\_\_\_\_



Krokodilen började spela TV-spel



Klockan är nu



Hur länge spelade han?

\_\_\_\_\_





Hoppa fram en kvart i taget. Dra streck.

A sequence of seven analog clocks showing a 15-minute jump. The first clock is at 12:00 and is highlighted with a blue square. A pencil points to the second clock at 12:15. The sequence continues with clocks at 12:30, 12:45, 1:00, 1:15, 1:30, and 1:45.



A sequence of eight analog clocks showing a 15-minute jump. The first clock is at 3:00 and is highlighted with a blue square. The sequence continues with clocks at 3:15, 3:30, 3:45, 4:00, 4:15, 4:30, and 4:45. A crocodile illustration is at the bottom right.